





1. This note-  gets how many beats? 1 _____

2. This note-  gets how many beats? 2 _____

3. This note-  gets how many beats? 4 _____

4. This note-  gets how many beats? $1/2$ _____

Use the Text Tool double-click next to the question, then type in the correct answer.



Using the articulation tool, click on the first note, then drag the little box next to the arrow over the correct note-



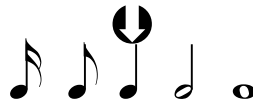
5. Which note is called a Half Note?



6. Which note is called a Whole Note?



7. Which note is called a Quarter Note?



8. Which note is called a Sixteenth Note?



9. Which note is called an Eight Note?



Use the scroll bar, or the page down key to see the rest of the worksheet >>>>>>

10. Using the shape tool, double-click on a line and drag the small triangle on the end of the line to the correct note.

